




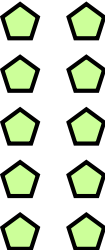

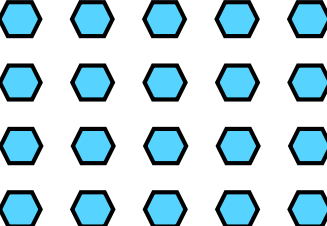




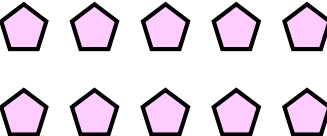

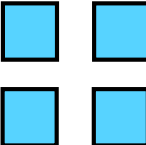
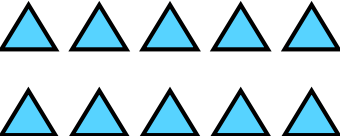





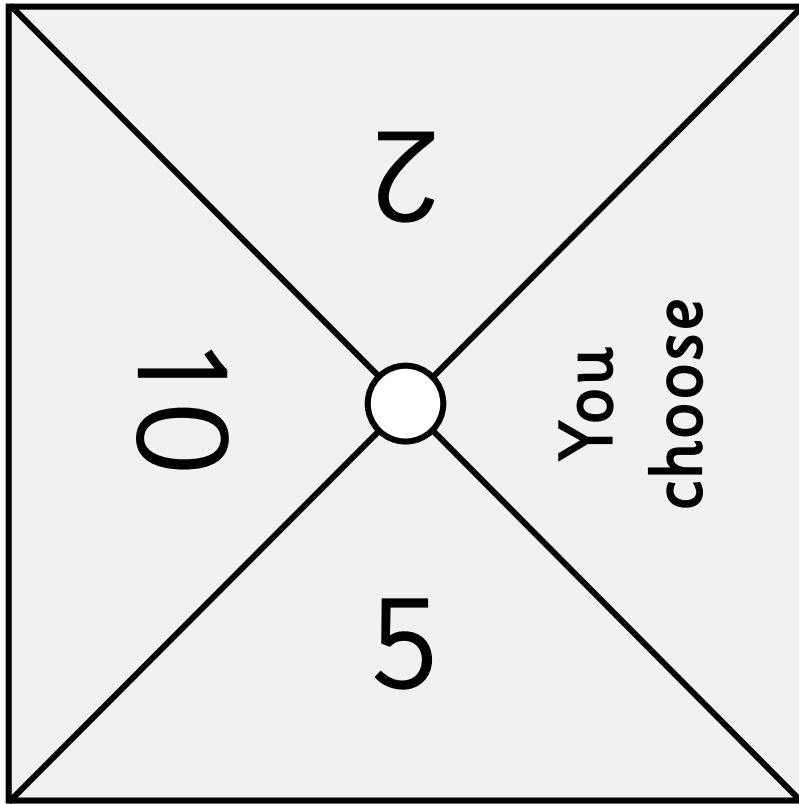


Spin the array

Take turns with a partner to spin the two spinners. Use these numbers to find an array on the game board that matches the number of rows and columns. Place a counter over your array. The player with the most arrays covered wins!

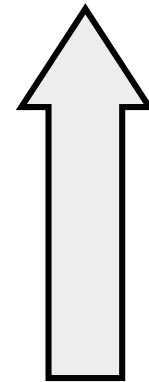
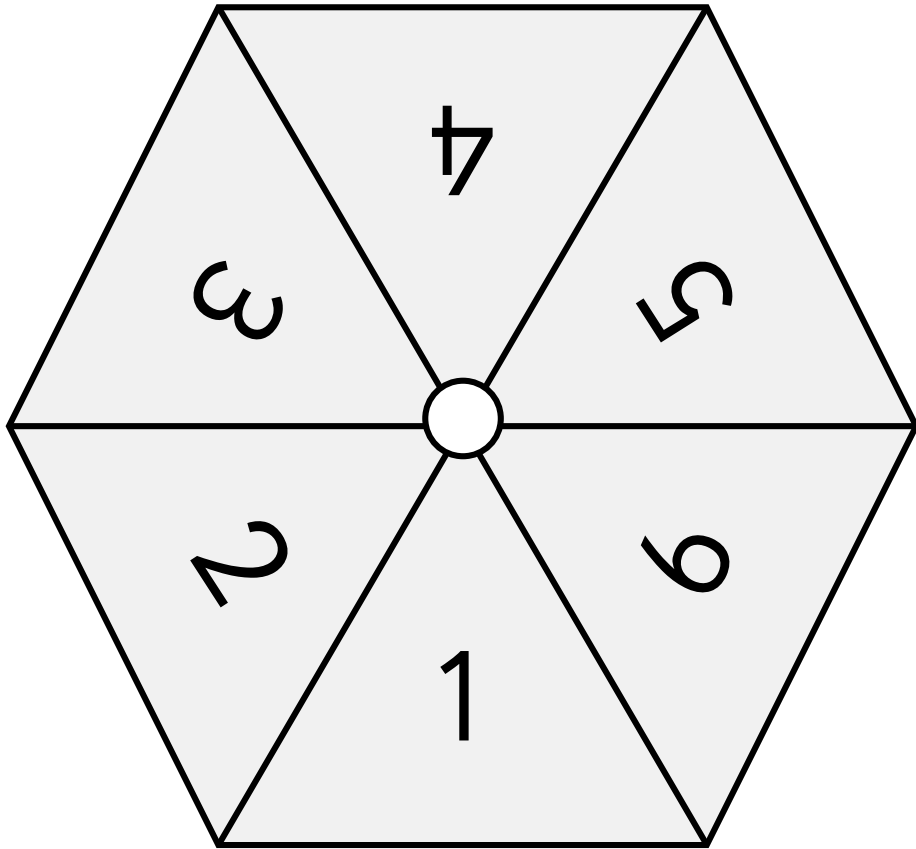
Spinner 2, 5 and 10



Cut out the spinner and arrow.

Attach the arrow to the centre circle of the spinner with a split pin.

Spinner 1 - 6



Cut out the spinner and arrow.

Attach the arrow to the centre circle of the spinner with a split pin.

Extension - challenge

For each array you have placed a counter over, describe the array by completing the sentences.
Then crate a number sentence to represent your array.

There are ____ rows. There are ____ columns. There are ____ altogether. Number sentence: _____	There are ____ rows. There are ____ columns. There are ____ altogether. Number sentence: _____	There are ____ rows. There are ____ columns. There are ____ altogether. Number sentence: _____	There are ____ rows. There are ____ columns. There are ____ altogether. Number sentence: _____	There are ____ rows. There are ____ columns. There are ____ altogether. Number sentence: _____
There are ____ rows. There are ____ columns. There are ____ altogether. Number sentence: _____	There are ____ rows. There are ____ columns. There are ____ altogether. Number sentence: _____	There are ____ rows. There are ____ columns. There are ____ altogether. Number sentence: _____	There are ____ rows. There are ____ columns. There are ____ altogether. Number sentence: _____	There are ____ rows. There are ____ columns. There are ____ altogether. Number sentence: _____
There are ____ rows. There are ____ columns. There are ____ altogether. Number sentence: _____	There are ____ rows. There are ____ columns. There are ____ altogether. Number sentence: _____	There are ____ rows. There are ____ columns. There are ____ altogether. Number sentence: _____	There are ____ rows. There are ____ columns. There are ____ altogether. Number sentence: _____	There are ____ rows. There are ____ columns. There are ____ altogether. Number sentence: _____
There are ____ rows. There are ____ columns. There are ____ altogether. Number sentence: _____	There are ____ rows. There are ____ columns. There are ____ altogether. Number sentence: _____	There are ____ rows. There are ____ columns. There are ____ altogether. Number sentence: _____	There are ____ rows. There are ____ columns. There are ____ altogether. Number sentence: _____	There are ____ rows. There are ____ columns. There are ____ altogether. Number sentence: _____